

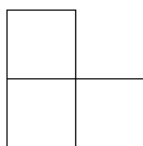
# Quadrados para escadas

## Ficha de Atividade

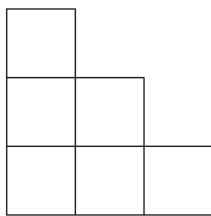
Como você vê as formas crescendo?



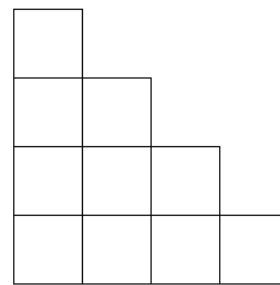
Caso 1



Caso 2



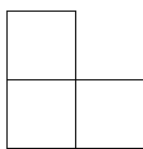
Caso 3



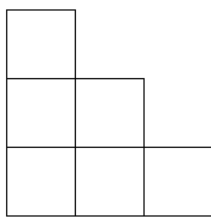
Caso 4



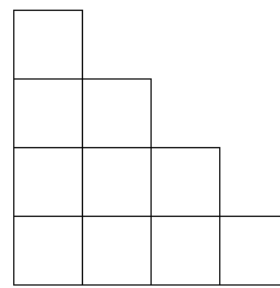
Caso 1



Caso 2



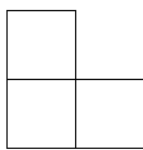
Caso 3



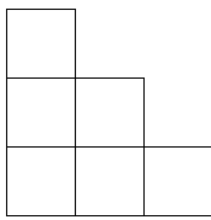
Caso 4



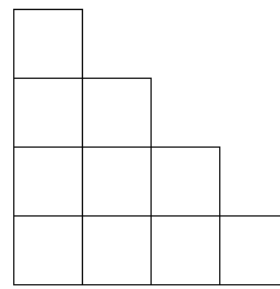
Caso 1



Caso 2



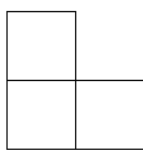
Caso 3



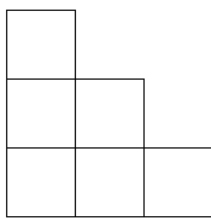
Caso 4



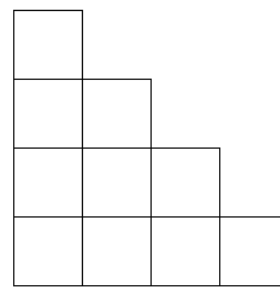
Caso 1



Caso 2



Caso 3



Caso 4